

## 102 學年四技二專第二次聯合模擬考試 電機與電子群 專業科目 (一) 詳解

102-2-03-4  
102-2-04-4

1	2	3	4	5	6	7	8	9	10	11	12	13	14	15	16	17	18	19	20	21	22	23	24	25
B	C	C	A	C	C	D	B	A	D	D	B	D	A	D	A	C	A	D	A	C	C	D	C	D
26	27	28	29	30	31	32	33	34	35	36	37	38	39	40	41	42	43	44	45	46	47	48	49	50
C	B	D	B	C	A	C	B	D	C	D	A	B	C	B	D	A	C	D	B	C	D	A	B	A

### 第一部份：基本電學

1.  $\because Q = It, \therefore I = \frac{Q}{t} = \frac{5}{10} = 0.5 \text{ A}$

$\therefore P = IV = 0.5 \times (60 - 20) = 20 \text{ W}$

2.  $W = 200 \times 6 + 800 \times (8 - 6) + 200 \times (12 - 8) + 600 \times (14 - 12) + 200 \times (18 - 14) + 1200 \times (22 - 18) + 300 \times (24 - 22) = 11000 \text{ W-H} = 11 \text{ 度}$   
 一個月共  $W_T = 11 \times 30 = 330 \text{ 度}$   
 共需付  $3 \times (330 - 30) + 50 = 950 \text{ 元}$

3.  $\because R = \rho \frac{l}{A}, \text{ 又 } E = I \times R, \text{ 且 } I \propto \frac{1}{R}$

則  $R \propto l, I \propto \frac{1}{l}, I \propto A$

$\therefore I_a : I_b : I_c = \frac{1}{R_a} : \frac{1}{R_b} : \frac{1}{R_c} = \frac{A_a}{l_a} : \frac{A_b}{l_b} : \frac{A_c}{l_c}$   
 $= \frac{1}{2} : \frac{1}{1} : \frac{2}{1} = 1 : 2 : 4$

4. 電流源 5 A 與 3 Ω 並接，欲求等效並聯電壓，即求 3 Ω 的電壓降，首先將其轉換成等效電壓源  
 總電壓  $E = 3 \times 4 + 5 \times 3 = 27 \text{ V}$   
 極性相同，總電阻  $R_T = 4 + 3 + 2 = 9 \Omega$

流經負載電流  $I = \frac{27}{9} = 3 \text{ A}$

依流入節點電流 = 流出節點  
 則流經 3 Ω 之電流  $I_{3\Omega} = 5 - I = 5 - 3 = 2 \text{ A}$

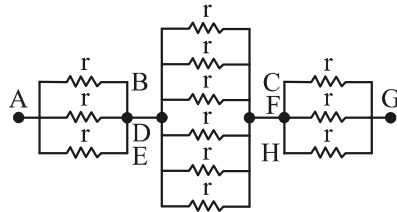
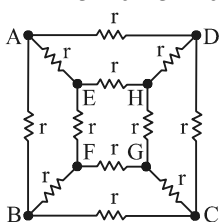
則並聯電壓為 3 Ω 之電壓降  $V_{3\Omega} = 2 \times 3 = 6 \text{ V}$

5. 合併同電位點，等效圖為：  
 依等效圖， $R_{ab} = R = 20 \Omega$

$R_{ac} = R_{ab} + R_{bc} = 20 + \frac{20}{4} = 25 \Omega$

$\therefore R_{ab} + 2R_{ac} = 20 + 25 \times 2 = 70 \Omega$

6.  $R_{AG} = \frac{r}{3} + \frac{r}{6} + \frac{r}{3} = \frac{5r}{6} = \frac{5}{6} \times 12 = 10 \Omega$



7. (A)  $R_{ca} = 1 + [2 // (1 + 3)] + 1 = \frac{10}{3} \Omega$

(B)  $R_{bc} = 1 + [3 // (2 + 1)] + 1 = \frac{7}{2} \Omega$

(C)  $R_{ab} = 1 + [1 // (2 + 3)] + 1 = \frac{17}{6} \Omega$

(D)  $\therefore 2R_{ab} + R_{ca} = 2 \times \frac{17}{6} + \frac{10}{3} = 9 \Omega$

8. 利用測得電路之開路電壓，應等於供應之電源電壓 E 之觀念求解，電源電壓  $E = V_{ab} = 48 \text{ V}$ ，開關閉合，電路電流  $I = 6 \text{ A}$ ，電路總電阻  $R_T = \frac{E}{I} = \frac{48}{6} = 8 \Omega$

(若有源電路內阻  $+R_{L1}$ ，當 a、c 間短路， $R_L$  沒作用)，

短路電流  $I_s = \frac{48}{(8-4)} = 12 \text{ A}$

9. 先將圖之右側電流源轉換為電壓源，即  $V = BR_b$ ，內阻  $R_b$  不變，極性為上正下負，利用 KVL 定律：

$A - R_b B = I(R_a + R_b)$ ，則電流  $I = \frac{A - R_b B}{R_a + R_b}$

10.  $V_a = \frac{\frac{40}{8} - \frac{8}{4} + \frac{16}{8}}{\frac{1}{8} + \frac{1}{4} + \frac{1}{8}} = 10 \text{ V}$ ， $\therefore V_a = V_{4\Omega} + (-8)$

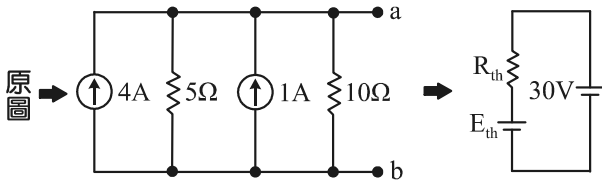
則 4 Ω 之電壓降  $V_{4\Omega} = 10 + 8 = 18 \text{ V}$

11.  $\begin{cases} (4+8)I_a + 4I_b = 4 \\ 4I_a + (4+2)I_b = 4 - 12 \end{cases} \Rightarrow \begin{cases} 12I_a + 4I_b = 4 \\ 4I_a + 6I_b = -8 \end{cases}$

化簡得  $I_a = 1 \text{ A}$ ， $I_b = -2 \text{ A}$ ，則  $5I_a - I_b = 5 - (-2) = 7 \text{ A}$

12.  $E_{TH} = (\frac{20}{5} + 1) \times (10 // 5) = \frac{50}{3} \text{ V}$ ， $R_{TH} = 5 // 10 = \frac{10}{3} \Omega$

$I = \frac{30 - E_{TH}}{R_{TH}} = \frac{30 - \frac{50}{3}}{\frac{10}{3}} = 4 \text{ A}$ ， $\therefore P = IV = 4 \times 30 = 120 \text{ W}$



13. 保留 5 A 電流源時  $I_A = 5 \text{ A}$   
 保留 10 V 電壓源時  $I_V = 0$   
 故  $I_{1\Omega} = 5 + 0 = 5 \text{ A}$  ,  $\therefore P = I_{1\Omega}^2 \times R = 5^2 \times 1 = 25 \text{ W}$

14. 利用節點電壓法：

$$\begin{cases} (\frac{1}{2} + \frac{1}{3})V_1 - \frac{1}{2}V_2 = 10 + 2 \\ -\frac{1}{2}V_1 + (\frac{1}{2} + \frac{1}{2})V_2 = -10 \end{cases} \Rightarrow \begin{cases} 5V_1 - 3V_2 = 72 \\ -V_1 + 2V_2 = -20 \end{cases}$$

$\Rightarrow$  化簡得  $V_1 = 12 \text{ V}$  ,  $V_2 = -4 \text{ V}$

$$\therefore a = \frac{V_1}{V_2} = \frac{12}{-4} = -3$$

$$\therefore I_1 = \frac{V_1 - 0}{R_1} = \frac{12 - 0}{3} = 4 \text{ A}$$

$$\therefore I_2 = \frac{V_2 - V_1}{R_2} = \frac{-4 - 12}{2} = -8 \text{ A}$$

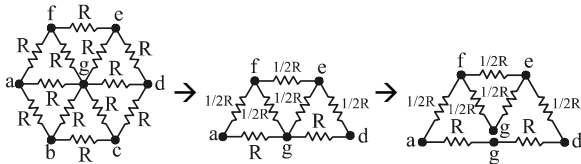
$$\therefore b = \frac{I_2}{I_1} = \frac{-8}{4} = -2$$

$$\therefore 4a + 2b = 4 \times (-3) + 2 \times (-2) = -16$$

15.  $R_X = R_{Th} = R_N = 4 \Omega$  ,  $E_{Th} = E_{ab} = 12 + 4 \times 5 = 32 \text{ V}$

$$I_N = \frac{32}{4} = 8 \text{ A} , P_{Lmax} = \frac{E_{Th}^2}{4R_{Th}} = \frac{32^2}{4 \times 4} = 64 \text{ W}$$

16.  $R_{ad} = (2 + 2) // \{1 + [(1 + 1) // 1] + 1\} = 1.6 \Omega$



17.  $H = \frac{I}{2\pi r} = \frac{1}{2\pi \times 0.1} = \frac{5}{\pi} \text{ AT/m}$

$$B = \mu H = 4\pi \times 10^{-7} \times \frac{5}{\pi} = 2 \times 10^{-6} \text{ Wb/m}^2$$

$$F = QvB = 5 \times 10^{-3} \times 10^5 \times 2 \times 10^{-6} = 1 \times 10^{-3} \text{ N}$$

18. 電容串聯總電容值會越串越小，故若欲最小電容值，需求串聯總電容值

$$C_{min} = C_1 \text{串} C_2 \text{串} C_3 = 4\mu \text{串} 10\mu \text{串} 20\mu$$

$$= \frac{20\mu}{5 + 2 + 1} = \frac{20}{8} \mu\text{F} = \frac{5}{2} \mu\text{F}$$

比較得  $A = 2$  ,  $B = 5$  ,  $\therefore 2A + B = 2 \times 2 + 5 = 9$

則答案滿足條件

19.  $\varphi = D \times A = \epsilon_0 \times \epsilon \times A = Q$

$$\therefore Q = 8.85 \times 10^{-12} \times 1 \times 4\pi \times (\frac{0.2}{2})^2 \times 4 \times 10^{-5}$$

$$= 4.44 \times 10^{-17} \text{ 庫倫}$$

又因每一個電子所荷的電荷量  $e = 1.602 \times 10^{-19}$  庫倫

故該球之核外電子數為  $n = \frac{Q}{e} = \frac{4.44 \times 10^{-17}}{1.602 \times 10^{-19}} = 277$  個

20.  $\therefore I = \frac{Q}{t}$  ,  $v = \frac{\ell}{t}$  ,  $\therefore \ell = vt$

1 個電子  $\approx 1.602 \times 10^{-19}$  庫倫

$$F = I\ell B \sin \theta = \frac{Q}{t} \times t \times v \times B \times \sin \theta = Q \times v \times B \times \sin \theta$$

$$= 1.602 \times 10^{-19} \times 10 \times 10 \times \sin 90^\circ = 1.6 \times 10^{-17} \text{ NT}$$

21.  $F = I\ell B = 10 \times 0.4 \times 0.5 = 2 \text{ NT}$

$$P = \frac{W}{t} = \frac{F \times S}{t} = 2 \times \frac{4}{0.2} = 40 \text{ W}$$

22. (A)  $\mu = \frac{B}{H} = \frac{10^{-2}}{10^3} = 10^{-5} \text{ H/m}$

$$(B) H = \frac{NI}{\ell} = \frac{10 \times 10^3}{2 \times 10^{-1}} = 5 \times 10^4 \text{ AT/m}$$

$$(C) B = \mu_0 \times H = 10^{-5} \times 5 \times 10^4 = 0.5 \text{ Tesla}$$

$$(D) \phi = BA = 0.5 \times 2 \times 10^{-2} = 1 \times 10^{-2} \text{ Wb}$$

23. 由題意知充電已至平衡狀態，故  $C_1$ 、 $C_2$  視為斷路

$$\therefore V_{7\Omega} = 72 \times \frac{7}{2+7} = 56 \text{ V}$$

$$\therefore Q_2 = C_2 \times V_{7\Omega} = 56 \times 3 \mu = 168 \mu\text{C}$$

24. (A) 不影響

(B) 不影響

(C) 總阻抗變小， $I$  變大

(D)  $I = 0 \text{ A}$

25. (A)  $i = \frac{24}{2+6} = 3 \text{ A}$

$$(B) i_L = \frac{24}{2 + (6 // 3)} = 6 \text{ A}$$

$$(C) W_L = \frac{1}{2} i_L^2 L = \frac{1}{2} \times (6 \times \frac{6}{6+3})^2 \times 3 = 24 \text{ J}$$

$$(D) v_L = V_{Th} = 24 \times \frac{6}{2+6} = 18 \text{ V}$$

26. CMOS (Complementary Metal-Oxide Semiconductor, 互補性氧化金屬半導體) 中的「M」代表金屬

27.  $\therefore C = \frac{\epsilon A}{d}$  ,  $\therefore C \propto \frac{1}{d}$  , 當外加逆向電壓增加時，空乏區寬度將增加，空乏區形成之電容值隨之減少

28.  $I_D = I_S (e^{\frac{V_D}{V_T}} - 1) = 5 \mu \times (e^{\frac{0.26}{2 \times 10^{-2}}} - 1) = 5 \mu \times (e^5 - 1)$   
 $\approx 5 \mu \times 148 = 0.74 \text{ mA}$

29. 電路可化簡為：

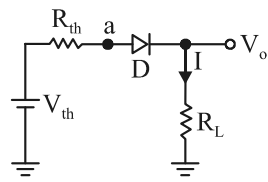
$$(V_{th} = V_+ \times \frac{R_2}{R_1 + R_2} = 12.5 \text{ V} \times \frac{20 \text{ k}\Omega}{5 \text{ k}\Omega + 20 \text{ k}\Omega} = 10 \text{ V}) > 0 \text{ V}$$

二極體順向導通  $R_{th} = R_1 // R_2 = 5 \text{ k}\Omega // 20 \text{ k}\Omega = 4 \text{ k}\Omega$

$$V_o = V_{th} \times \frac{R_L}{R_{th} + R_L} = 10 \times \frac{16 \text{ k}\Omega}{4 \text{ k}\Omega + 16 \text{ k}\Omega} = 8 \text{ V}$$

$$I = \frac{V_{th}}{R_{th} + R_L} = \frac{10 \text{ V}}{4 \text{ k}\Omega + 16 \text{ k}\Omega} = 0.5 \text{ mA}$$

$$P_{RL} = I^2 R_L = (0.5\text{m})^2 \times 16\text{k} = 4\text{ mW}$$



30.  $\because V_i = 12V_{p-p}$ ,  $\therefore V_{ip} = 6\text{ V}$  又  $V_z = 5.1\text{ V}$   
故輸入已達穩納之崩潰電壓  $6\text{ V}$ ,  $\therefore V_o = V_z = 5.1\text{ V}$
31. 由最大功率轉移定理知當變壓器初級線圈等效阻抗等於  $R_s$  ( $500\ \Omega$ ) 時, 電路之阻抗完全匹配, 可讓揚聲器獲得最大之功率, 此時初級線圈之有效電壓值為  
$$\therefore V_{1(\text{rms})} = \frac{V_m}{\sqrt{2}} \times \frac{R_s}{R_s + R_L} = \frac{10\sqrt{2}}{\sqrt{2}} \times \frac{500}{500 + 500} = 5\text{ V}$$
  
初級線圈之功率為  $P_{\text{max}} = \frac{V^2}{R_L} = \frac{5^2}{500} = 50\text{ mW}$   
因理想變壓器無損失, 則揚聲器亦可獲得最大之功率為  $50\text{ mW}$
32. (甲)  $\because V_o = 0\text{ V}$ ,  $\therefore P_{L1} = \frac{V^2}{R} = \frac{0^2}{1\text{ k}} = 0\text{ W}$   
(乙)  $\because V_o = 0\text{ V}$ ,  $\therefore P_{L2} = \frac{V^2}{R} = \frac{0^2}{1\text{ k}} = 0\text{ W}$   
(丙)  $\because V_o = 2\text{ Vm} = 20\text{ V}$ ,  $\therefore P_{L3} = \frac{V^2}{R} = \frac{20^2}{1\text{ k}} = 0.4\text{ W}$   
(丁)  $\because V_o = 0\text{ V}$ ,  $\therefore P_{L4} = \frac{V^2}{R} = \frac{0^2}{1\text{ k}} = 0\text{ W}$
33. 欲降低輸出電壓漣波因數的效果有下列方式: (1) 輸入端由半波整流器改為全波整流器、(2) 增加電感值、(3) 增加  $C_1$  之容值、(4) 增加  $C_2$  之電容值  
(A) 輸入端由半波整流器改為全波整流器  
 $\because r = \frac{V_{\text{rms}}}{V_{\text{dc}}}$  全波整流的  $V_{\text{dc}}$  大於半波整流
- (B)  $\because X_L = 2\pi fL$ , 增加電感量,  $X_L$  亦增加, 則  $r$  下降
- (C)  $\because X_C = \frac{1}{2\pi fC}$ , 增加  $C$  值,  $X_C$  下降, 則  $r$  下降
34. (A)  $C_1$  及  $C_2$  為隔離電容器  
(B)  $C_3$  為去交連電容器  
(C)  $C_E$  為旁路電容器  
(D)  $C_E$  及  $C_3$  為提高電壓增益
35. 影響低頻響應有: 旁路電容、交連電容  
影響高頻響應有: 極際電容、雜散電容、電晶體之  $h_{FE}$
36.  $\beta = \frac{\alpha}{1-\alpha} = \frac{0.99}{1-0.99} = 99$   
 $I_C = \beta I_B + (1+\beta)I_{CBO} = 99 \times 20\ \mu + (1+99) \times 5\ \mu$   
 $= 2480\ \mu\text{A} = 2.48\text{ mA}$
37. 由圖(b)知  $V_{CEQ} = 6\text{ V}$ ,  $I_{CQ} = 1.5\text{ mA}$   
 $\therefore I_B = \frac{I_{CQ}}{\beta} = \frac{1.5\text{ m}}{100} = 15\ \mu\text{A}$

$$I_B = \frac{V_{CC} - V_{BE}}{R_B + R_E(1+\beta)} = \frac{12 - 0.6}{R_B + 1\text{ k}(1+100)} = 15\ \mu\text{A}$$

化簡得  $R_B = 659\text{ k}\Omega$ , 故選  $R_B = 660\text{ k}\Omega$  電阻較適當

38.  $\because V_{CE} = V_{CC} - I_C(R_C + R_E)$   
當  $V_{CC}$  定值時,  $I_C$  減少, 則  $V_{CE}$  增加
39.  $I_B = \frac{V_{CC} - V_{BE}}{R_B + R_E(1+\beta)} = \frac{10 - 0.7}{750\text{ k} + 2.5\text{ k}(1+100)} = 9.3\ \mu\text{A}$   
 $I_E = (1+\beta)I_B = (1+100) \times 9.3\ \mu\text{A} \approx 0.93\text{ mA}$   
 $Z_o = r_c = \frac{26\text{ mV}}{I_E} = \frac{26\text{ mV}}{0.93\text{ mA}} \approx 28\ \Omega$
40.  $A_V = -\frac{R_C}{R_E} = -\frac{5.1\text{ k}}{6.8\text{ k}} = -0.75$
41.  $A_V = \frac{V_o}{V_i} = -g_m(R_D // r_d) = -2\text{ m} \times (15\text{ k} // 30\text{ k}) = -20$
42.  $r_e = \frac{r_\pi}{1+\beta} = \frac{1\text{ k}}{100} \approx 10\ \Omega$   
 $Z_i = R_{B1} // r_\pi \approx r_\pi \approx 1\text{ k}\Omega$   
 $Z_o = R_{B1} // R_C \approx R_C \approx 3\text{ k}\Omega$   
 $A_V = -\frac{R_{B1} // R_C}{r_e} \approx -\frac{R_C}{r_e} = -\frac{3\text{ k}}{10} = -300$   
 $A_i = |A_V| \times \frac{Z_i}{Z_o} = 300 \times \frac{1\text{ k}}{3\text{ k}} = 100$
43. 靈頓放大器是(1) 由兩個射極隨耦器串聯所組成, 具有強化共集極(CC)電路的特性  
(2) 高電流增益, 低電壓增益  
(3) 高輸入阻抗, 低輸出阻抗  
(4) 適用於阻抗匹配
44.  $f_{TL} = f_L \times \frac{1}{\sqrt{2^n - 1}} = 32\text{ k} \times \frac{1}{\sqrt{(2^2) - 1}}$   
 $= 32\text{ k} \times \frac{1}{0.64} = 50\text{ kHz}$   
 $f_{TH} = f_L \times \sqrt{2^n - 1} = 2\text{ M} \times \sqrt{2^2 - 1}$   
 $= 200\text{ k} \times 0.64 = 128\text{ kHz}$   
 $BW = f_{TH} - f_{TL} = 128\text{ k} - 50\text{ k} = 78\text{ kHz}$
45.  $\text{dB}_T = \text{dB}_1 + \text{dB}_2 = 20 + 40 = 60\text{ dB}$ , 又  $\text{dB}_V = 20\log A_V$   
 $\therefore 60 = 20\log A_V$ , 得  $A_V = 1000$   
又  $\because A_V = \frac{V_o}{V_i} = \frac{V_o}{0.1\text{ m}} = 1000$   
 $\therefore V_o = 1000 \times 0.1\text{ m} = 0.1\text{ V}$   
 $\therefore P_{O(\text{rms})} = \frac{V_{O(\text{rms})}^2}{R} = \frac{(\frac{0.1}{\sqrt{2}})^2}{4} \approx 1.25\text{ mW}$
46.  $V_{DS}$  很小, 靠近原點可做壓控電阻
47. N 通道  $V_{DS} \geq V_{GS} - V_p \Rightarrow V_D - V_S \geq V_G - V_S - V_p$   
 $\Rightarrow V_D \geq V_G - V_p \Rightarrow V_D \geq V_G - (-4) \Rightarrow V_D \geq V_G + 4$   
代入僅(D)選項對, 其中(A)選項  $|V_{GS}| \geq |V_p|$  不合

理，故不選

$$48. \text{ 由 } I_D = I_{DSS} \left(1 - \frac{V_{GS}}{V_p}\right)^2$$

$$\text{代入爲 } 4 \text{ m} = 16 \text{ m} \left(1 - \frac{V_{GS}}{-4}\right)^2, \quad \frac{1}{4} = \left(1 - \frac{V_{GS}}{-4}\right)^2 = \left(1 - \frac{1}{2}\right)^2$$

$$\therefore \frac{1}{2} = \frac{V_{GS}}{-4}, \quad \therefore V_{GS} = -2 \text{ V}$$

$$49. \therefore I_D = K(V_{GS} - V_T)^2$$

$$\Rightarrow K = \frac{I_D}{(V_{GS} - V_T)^2} = \frac{3 \text{ m}}{(6-3)^2} = \frac{1}{3} \text{ mA/V}$$

$$\therefore g_m = 2K(V_{GS} - V_T) = 2 \times \frac{1 \text{ m}}{3} \times (9-3) = 4 \text{ mS}$$

$$50. I_D = k(V_{GS} - V_T)^2 = 0.5 \text{ m}(4-1)^2 = 4.5 \text{ mA}$$

$$V_{DS} = V_{DD} - I_D(R_D + R_S) = 20 - 4.5 \text{ m}(2 \text{ k} + 1 \text{ k}) = 6.5 \text{ V}$$